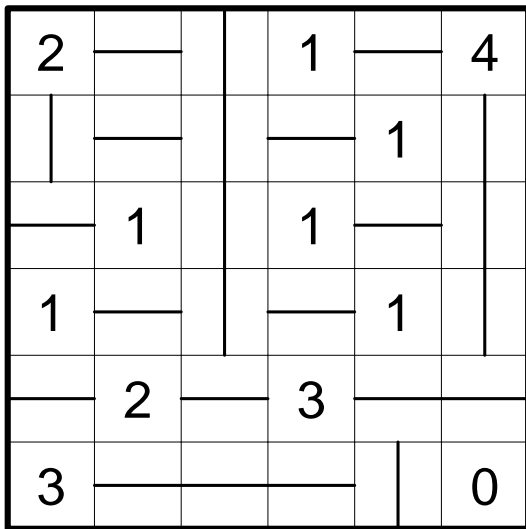
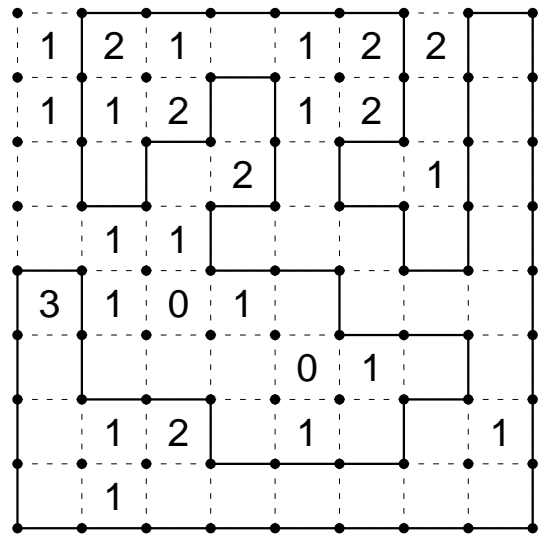


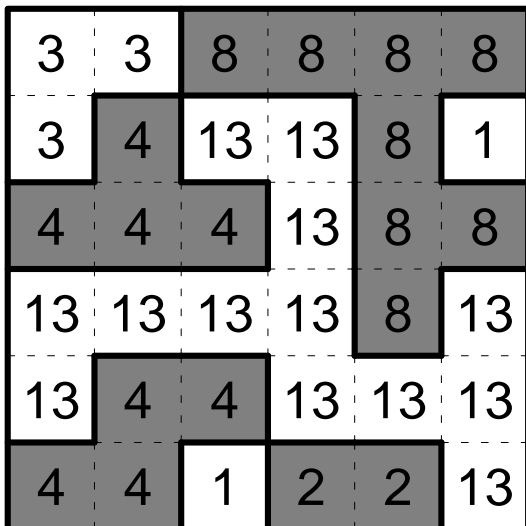
Lösungen zu Runde 7: Zahlensysteme



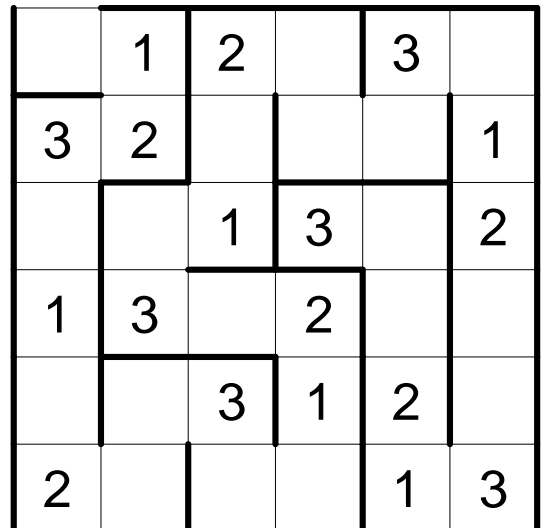
7.1 Walls



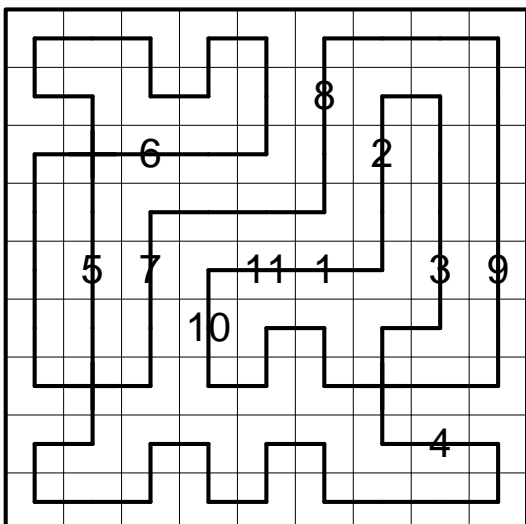
7.2 Rundweg



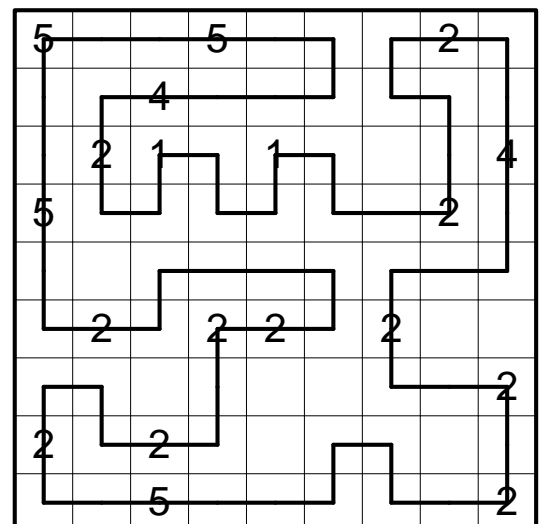
7.3 Kariertes Fillomino



7.4 Magisches Labyrinth



7.5 Bahnhöfe (oder 11..1 statt 1..11)



7.6 Geradeweg

9		5					
	8		8				

7.7 Inseln (Basis: 4)

8	8	8	8	8	8	8	8
7	7	7	7	7	7	2	1
6	6	6	6	2	7	2	6
6	2	2	6	2	6	6	6
2	3	3	1	6	6	3	7
2	3	2	2	8	3	3	7
8	8	8	8	8	8	8	7
1	3	3	3	7	7	7	7

7.8 Fillomino (Basis: 6)

	19		16	6	16	16		15
5	2	3		5		4	6	1
19		4	5	3	6	1		2
3	6	2	4	1	5		3	
1	4		1		2	3	5	6
16	1		6	2	3	5		4
4	3	1		4		6	2	5
7	5	6	3		1	2	4	
17		5	2	6	4		1	3

7.9 Doppelblock (Basis: 8)

		6						1		
		3						7		
		6						3		
		2		13	7	12	12	7		
14	8	5	3	6				7	1	
	1	3	1		3					
6	6	6		2	4		6		1	5
	7	14	3	4			1	5	6	2
	6	15		6			3	7	5	
7	7	7	6	1		5	2		4	3
	2	3				2			3	
	7	7	2	5						7

7.10 Japanische Summen (Basis: 6)

	2	3		5		1	
3	4	3	2	1	5	6	
2	2	1	6	3	4	5	
1	6	5	4	2	1	3	4
2	5	6	1	4	3	2	
5	1	2	3	5	6	4	2
4	3	4	5	6	2	1	3
	3	2					4

7.11 Hochhäuser